

# Hard Geometric Problem

4 October 2019

Jim Stevenson

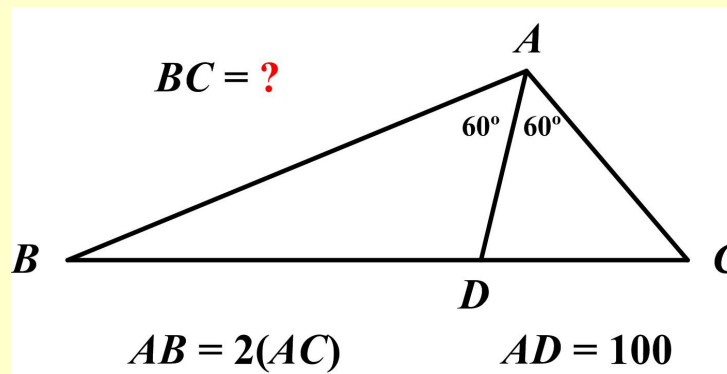
This is another problem from the indefatigable Presh Talwalkar.

(<https://mindyourdecisions.com/blog/2019/09/09/hard-geometry-problem-from-switzerland/#more-32496>, retrieved 10/3/2019)

## Hard Geometry Problem From Switzerland

Posted September 9, 2019 By Presh Talwalkar.

This problem is adapted from a math contest in Switzerland—no calculators allowed.



In triangle  $ABC$  above, angle  $A$  is bisected into two  $60^\circ$  angles. If  $AD = 100$ , and  $AB = 2(AC)$ , what is the length of  $BC$ ?

### Solution

I tried to solve the problem with the obvious law of cosines, but I couldn't unsnarl the results. It turned out that I also needed to use the (obscure to me) angle bisector theorem or the law of sines, which is how Talwalkar solved the problem (see below).

Instead, I noticed that the key points,  $B, C, D$  could all be represented by complex numbers via the modulus-argument form, as shown in Figure 1, where the length  $r$  ( $AB$ ) was to be determined. The length  $r$  was like a scale factor that should be established via the length  $AD = 100$ .

First, I needed to convert the complex numbers to Cartesian coordinates:

$$100e^{i\frac{\pi}{3}} = 100(\cos 60 + i \sin 60) = 100\left(\frac{1}{2} + i\frac{\sqrt{3}}{2}\right) = 50 + i50\sqrt{3}$$

and

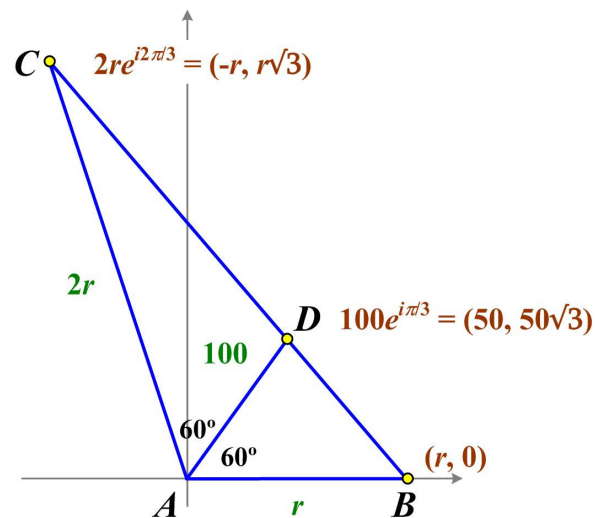


Figure 1 My Solution

$$2re^{i\frac{2\pi}{3}} = 2r(\cos 120 + i \sin 120) = 2r(-\frac{1}{2}) + i2r(\frac{\sqrt{3}}{2}) = -r + ir\sqrt{3}$$

Then the length  $BC$  is given by

$$BC = \sqrt{(0 - r\sqrt{3})^2 + (r - (-r))^2} = \sqrt{3r^2 + 4r^2} = \sqrt{7}r$$

Now the slope of  $BD$  is the same as the slope of  $BC$ , so using the Cartesian coordinates we have

$$\frac{0 - 50\sqrt{3}}{r - 50} = \frac{0 - r\sqrt{3}}{r - (-r)}$$

$$\frac{50}{r - 50} = \frac{1}{2}$$

$$r = 150$$

And so

$$BC = 150\sqrt{7}$$

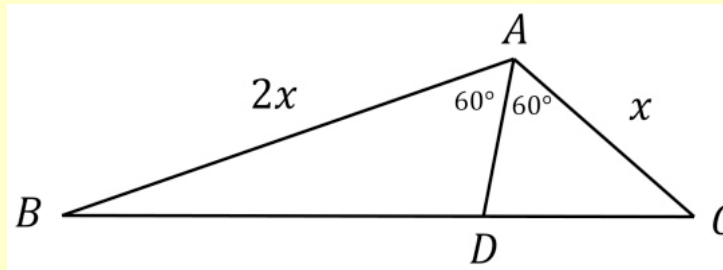
## Talwalkar Solution

Talwalkar begins with a quote that I thought appropriate to include:

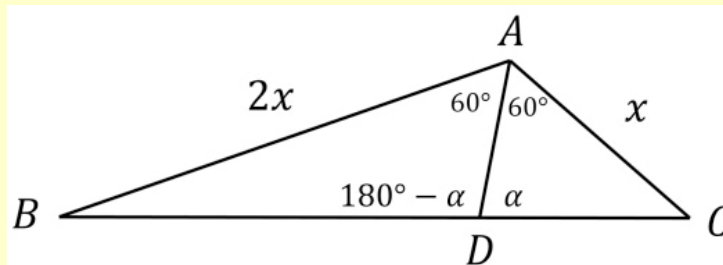
“Anyone who knows, and knows that he knows,  
makes the steed of intelligence leap over the vault of heaven.  
Anyone who does not know but knows that he does not know,  
can bring his lame little donkey to the destination nonetheless.  
Anyone who does not know, and does not know that he does not know,  
is stuck forever in double ignorance.”

— Nasir al-Din al-Tusi

Let  $AC = x$  so then  $AB = 2x$ .



Let angle  $ADC = \alpha$  so then angle  $ADB = 180^\circ - \alpha$ .



Now we will show  $BD = 2(DC)$ . This immediately follows from the **angle bisector theorem**, but let us prove it.

In triangle  $ADC$ , we will use the **law of sines**—which I read was first described by the Persian mathematician al-Tusi. (Perhaps we should call it Al-Tusi's law of sines).

We get:

$$DC/\sin 60^\circ = x/\sin \alpha$$

Now we use the law of sines in triangle  $ADB$  to get:

$$BD/\sin 60^\circ = 2x/\sin (180^\circ - \alpha)$$

Now recall  $\sin (180^\circ - \alpha) = \sin \alpha$ , so we have:

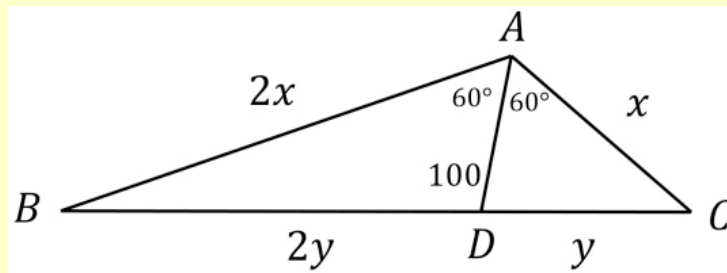
$$BD/\sin 60^\circ = 2x/\sin \alpha$$

Hence we can divide the two equations to get:

$$BD/DC = 2$$

$$BD = 2(DC)$$

Now suppose  $DC = y$  so  $BD = 2y$ .



Using Al-Kashi's **law of cosines** in triangle  $ADC$  we get:

$$y^2 = x^2 + 100^2 - 2(x)(100)\cos 60^\circ$$

$$y^2 = x^2 + 100^2 - 100x$$

Similarly, using Al-Kashi's law of cosines in triangle  $ADB$  we get:

$$(2y)^2 = (2x)^2 + 100^2 - 2(2x)(100)\cos 60^\circ$$

$$4y^2 = 4x^2 + 100^2 - 200x$$

So we have a system of two equations:

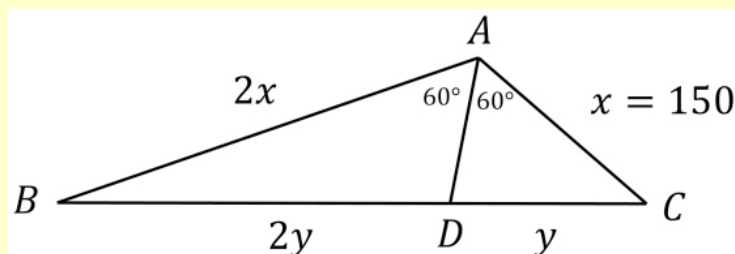
$$y^2 = x^2 + 100^2 - 100x$$

$$4y^2 = 4x^2 + 100^2 - 200x$$

If we multiply the first equation by 4 and then subtract the second we get:

$$0 = 3(100^2) - 200x$$

$$x = 150$$



Now we use Al-Kashi's law of cosines to solve for  $y$  in triangle  $ADC$ :

$$y^2 = 150^2 + 100^2 - 100(150)$$

$$y^2 = 17500$$

Since lengths are positive, we take the positive root:

$$y = 50\sqrt{7}$$

Finally we want to solve for  $BC = 3y$ , so we get  $BC = 150\sqrt{7}$ .

It's a pretty neat problem, and it's fun that it can be solved without a calculator!

## Source

Adapted from FJSM 2019 semi-final (the problem was emailed to me)

[http://www.smasv.ch/de/alle\\_aufgaben.php](http://www.smasv.ch/de/alle_aufgaben.php)

Tusi mathematician

[https://en.wikipedia.org/wiki/Nasir\\_al-Din\\_al-Tusi](https://en.wikipedia.org/wiki/Nasir_al-Din_al-Tusi)

[http://www-history.mcs.st-andrews.ac.uk/Biographies/Al-Tusi\\_Nasir.html](http://www-history.mcs.st-andrews.ac.uk/Biographies/Al-Tusi_Nasir.html)

Angle bisector theorem

[https://en.wikipedia.org/wiki/Angle\\_bisector\\_theorem](https://en.wikipedia.org/wiki/Angle_bisector_theorem)